

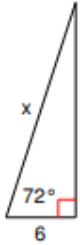
Name _____

Period _____ Date _____

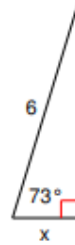
Homework 3.5

Choose the appropriate trigonometric ratio to use to find the missing side then write an equation to solve for that missing side. Round your answer to the nearest tenth.

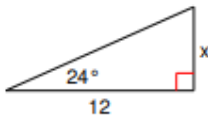
1)



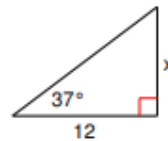
2)



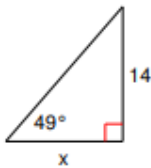
3)



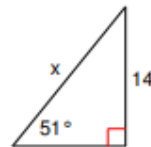
4)



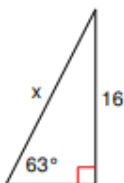
5)



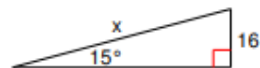
6)



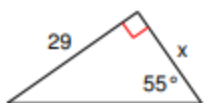
7)



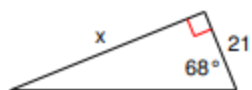
8)



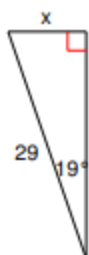
9)



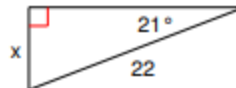
10)



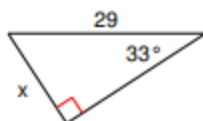
11)



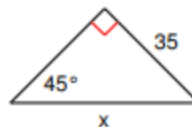
12)



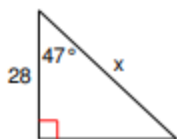
13)



14)



15)



16)

