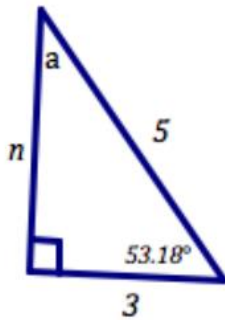


Homework 3.1

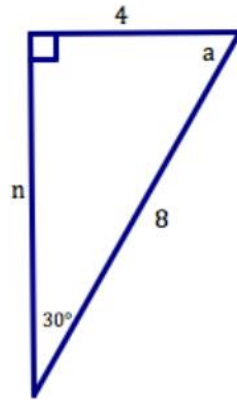
Topic: Properties of angles and sides in right triangles

For each right triangle below find the missing side n (Pythagorean Theorem could be helpful) and the missing angle, a (Angle Sum Theorem for Triangles could be useful).

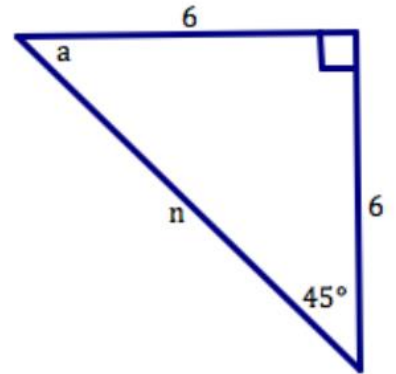
1.



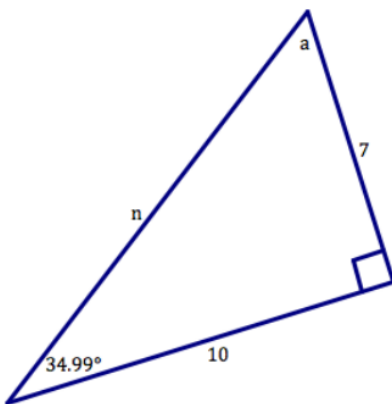
2.



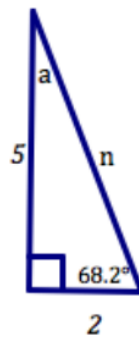
3.



4.



5.



6.

