



3/30/2021

Integrated Math 1

Extra Practice



Mike Efram and Todd Sheehy
HEALDSBURG UNIFIED SCHOOL DISTRICT

Rite Of Passage Practice #1

Solve for the variable

1. $4d = 44$

2. $6d - 15 = 45$

3. $5d - 5 = 25 + 3d$

4. $7(x + 2) = -9(5x - 7)$

5. $\frac{2}{3}x + 7 = \frac{9}{5}$

6. $7(x + 2) + 3x = -9(5x - 7) - 100$

Rite Of Passage Practice #2

Solve for the variable

1. $8d = 32$

2. $4d - 25 = 55$

3. $5d - 15 = 20 + 3d$

4. $7(x+5) = -6(5x-7)$

5. $\frac{3}{2}x + 7 = \frac{9}{5}$

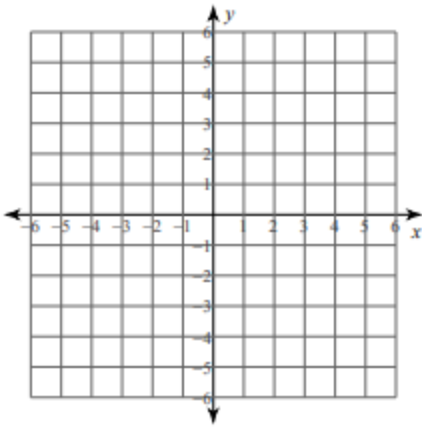
6. $7(x+5) + 3x = -6(5x-7) - 100$

Graphing Lines

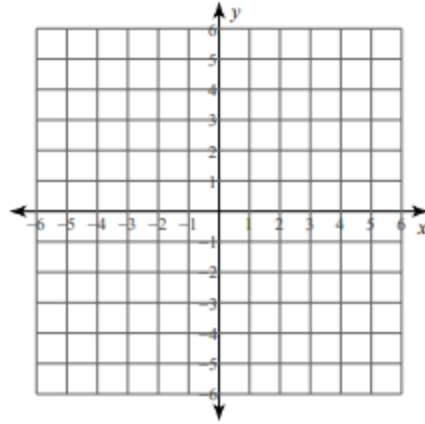
Date _____ Period _____

Sketch the graph of each line.

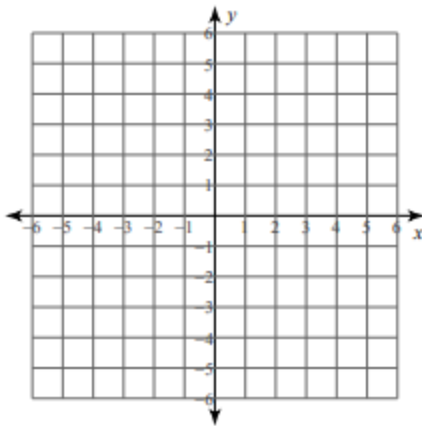
1) $y = \frac{7}{2}x - 2$



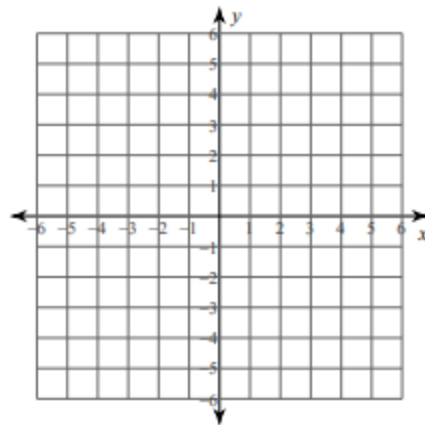
2) $y = -6x + 3$



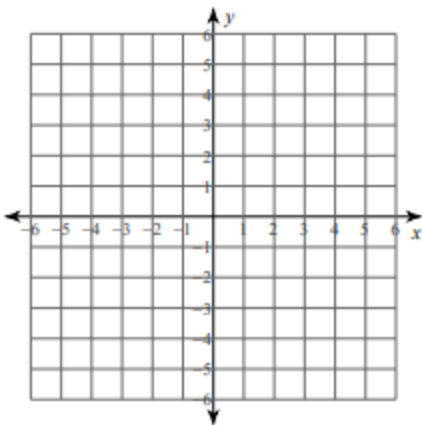
3) $y = -5$



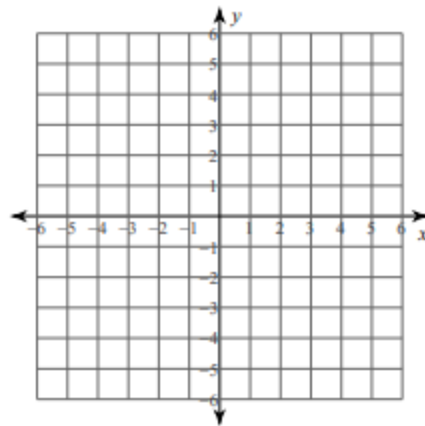
4) $y = \frac{6}{5}x + 1$



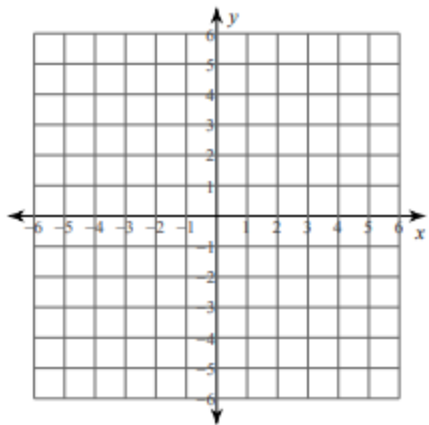
5) $y = \frac{1}{4}x + 2$



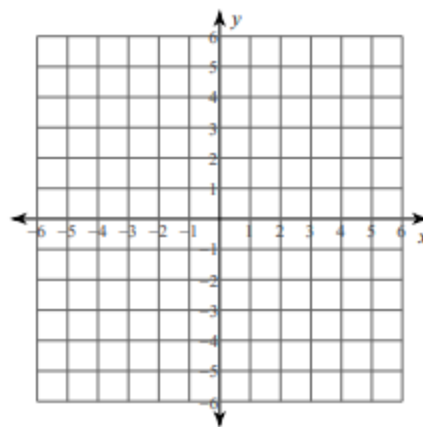
6) $x = 5$



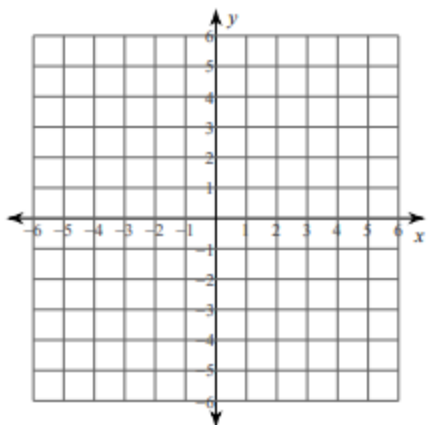
7) $y = \frac{5}{3}x$



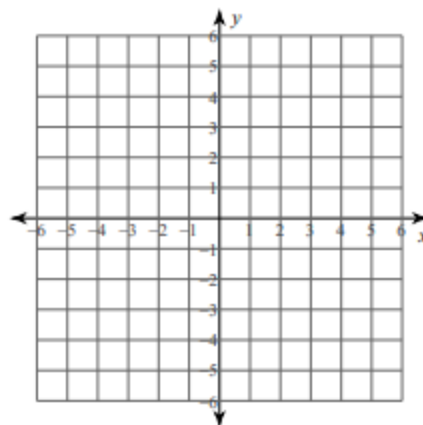
8) $x = 0$



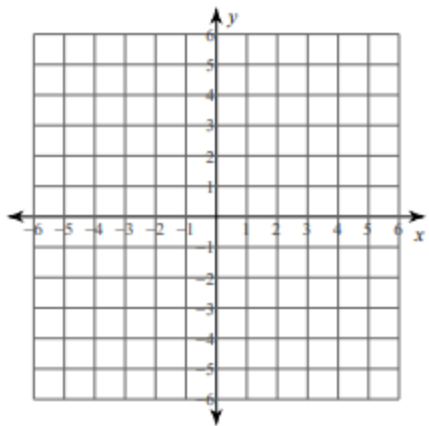
9) $y = -\frac{1}{3}x + 3$



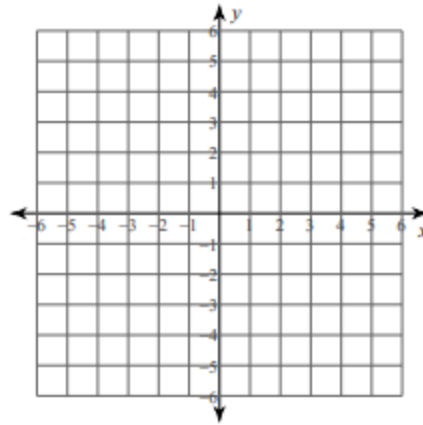
10) $y = \frac{1}{5}x - 4$



11) $y = \frac{1}{2}x - 2$



12) $y = 2x + 5$

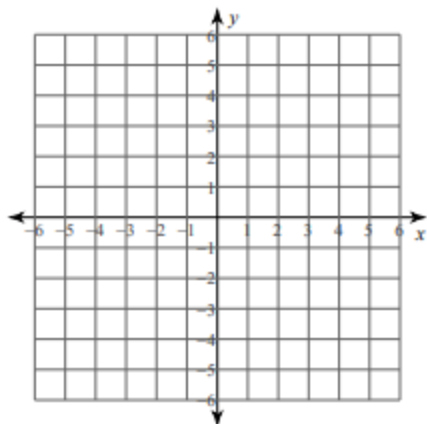


Graphing Lines

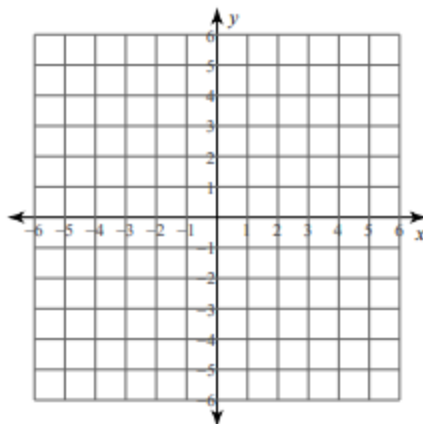
Date _____ Period _____

Sketch the graph of each line.

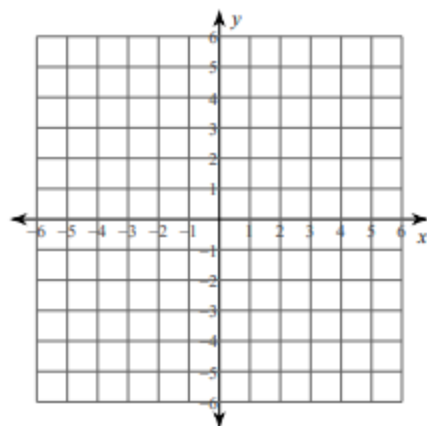
1) $7x + y = 5$



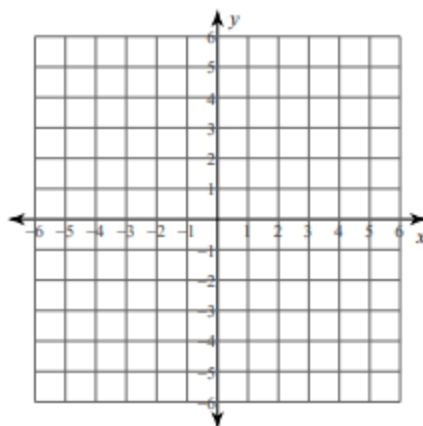
2) $3x + 5y = -5$



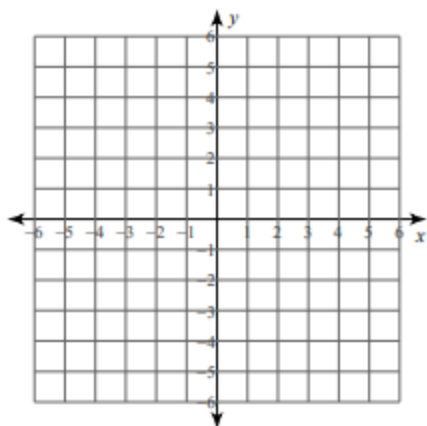
3) $y = 4$



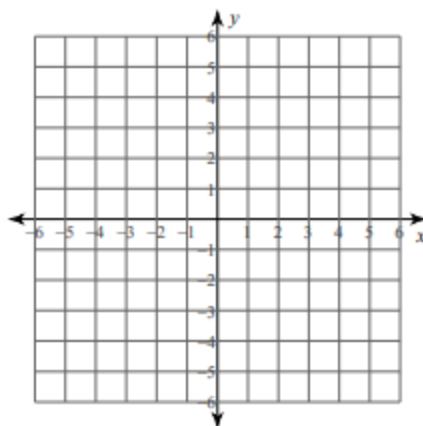
4) $6x + 5y = 20$



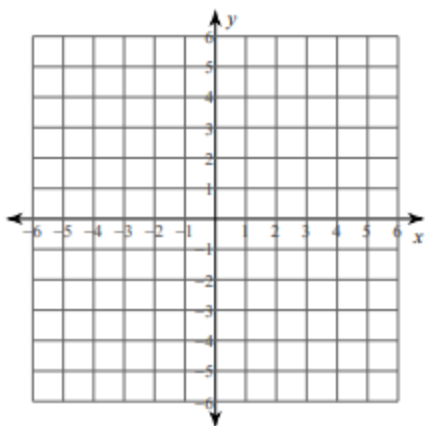
5) $x = -3$



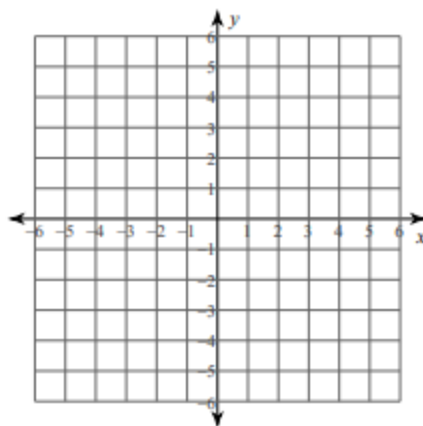
6) $2x + y = 4$



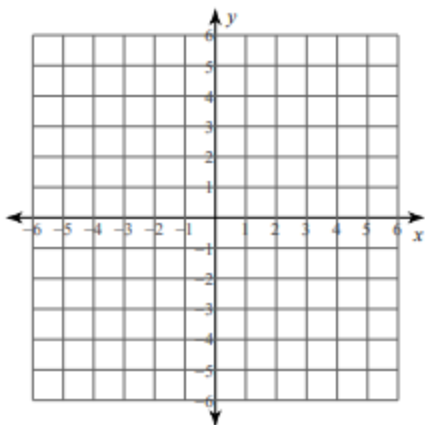
7) $x + y = 3$



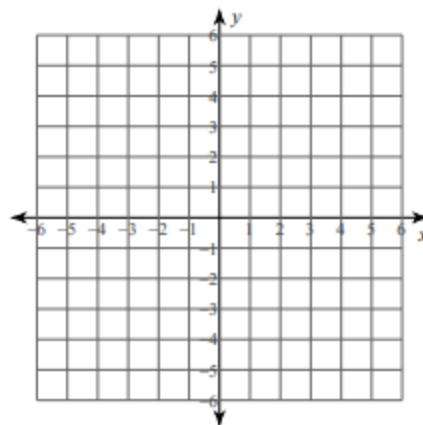
8) $10x - 3y = 15$



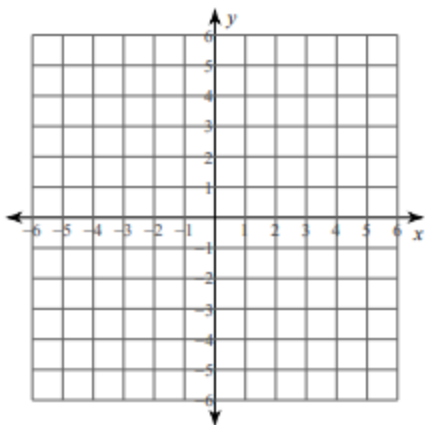
9) $x - y = 3$



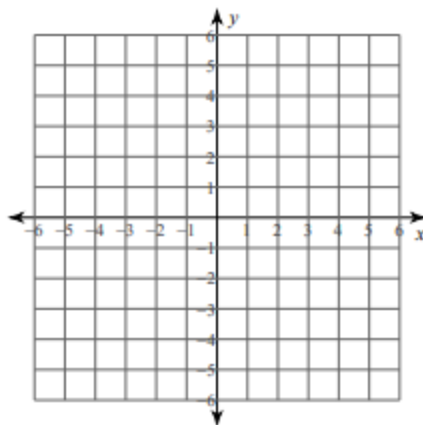
10) $y = 0$



11) $x + y = -3$



12) $x + y = -1$



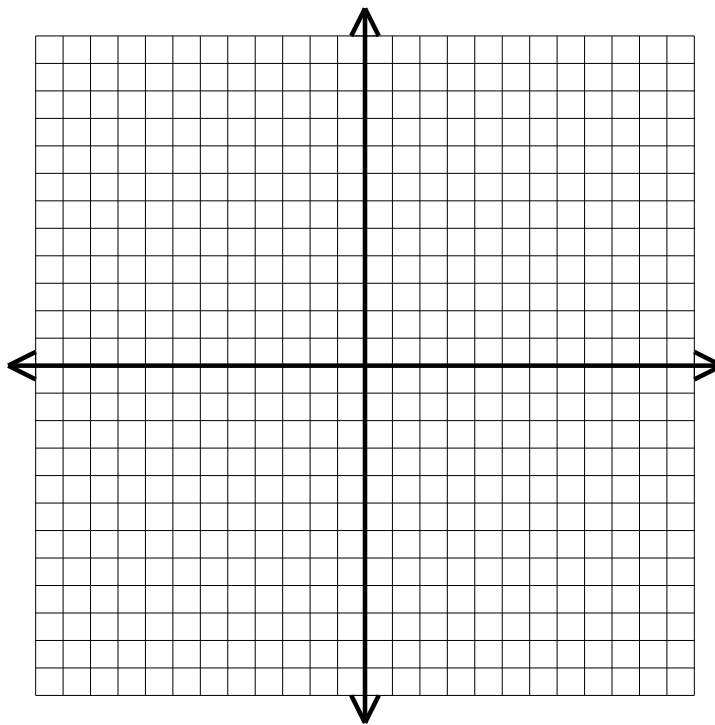
Rite of Passage Practice #1 – Systems of Equations

In order to do well in this class, you must show mastery in solving Equations, Graphing Equations, and Solving Systems of Equations. Please solve the following, without error.

Solve the system of equations by graphing

1.
$$\begin{cases} x - 2y = 6 \\ y = -4x + 6 \end{cases}$$

Solution:



Solve the system of equations by Substitution

2.
$$\begin{cases} x = y + 5 \\ 2x - 5y = 40 \end{cases}$$

Solve the system of equations by Elimination

3.
$$\begin{cases} x - 6y = -4 \\ -2x + y = -3 \end{cases}$$

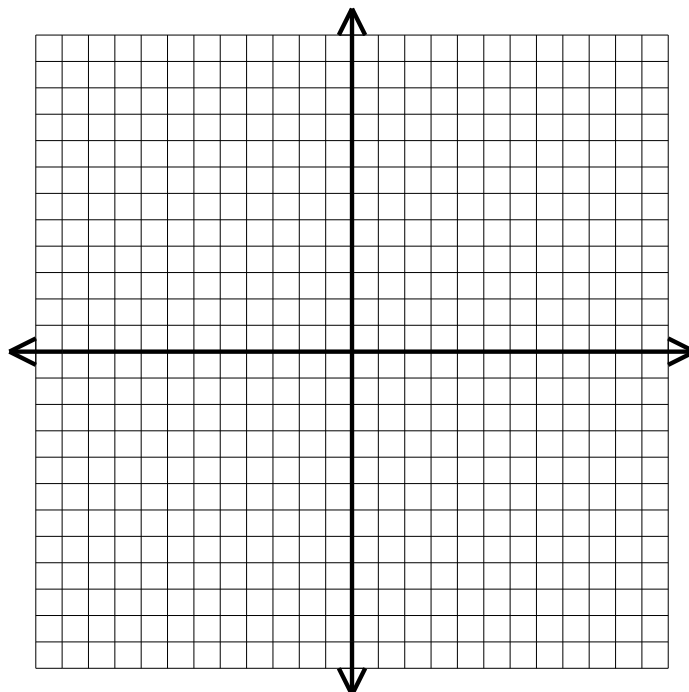
Rite of Passage Practice #2 – Systems of Equations

In order to do well in this class, you must show mastery in solving Equations, Graphing Equations, and Solving Systems of Equations. Please solve the following, without error.

Solve the system of equations by graphing

1.
$$\begin{cases} -3x + y = -3 \\ y = -2x + 7 \end{cases}$$

Solution:



Solve the system of equations by Substitution

2.
$$\begin{cases} y = x - 5 \\ y = \frac{2}{5}x - 5 \end{cases}$$

Solve the system of equations by Elimination

3.
$$\begin{cases} -4x + 9y = 9 \\ x - 3y = -6 \end{cases}$$